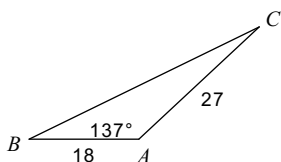


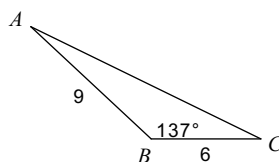
Law of Cosines

Find each measurement indicated. Round your answers to the nearest tenth.

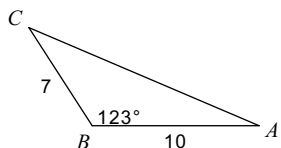
1) Find BC



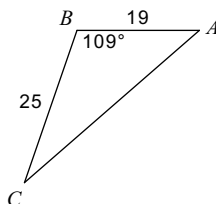
2) Find AC



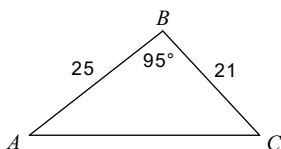
3) Find AC



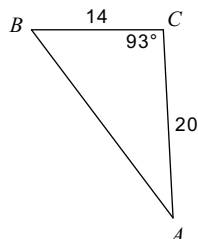
4) Find $m\angle C$



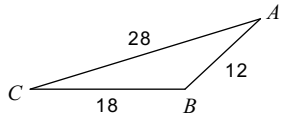
5) Find $m\angle C$



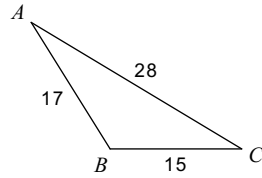
6) Find $m\angle A$



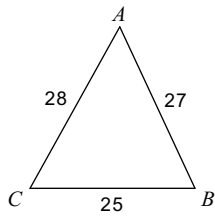
7) Find $m\angle B$



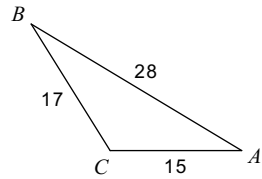
8) Find $m\angle B$



9) Find $m\angle A$

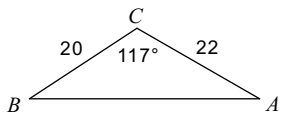


10) Find $m\angle C$



Solve each triangle. Round your answers to the nearest tenth.

11)



12)

